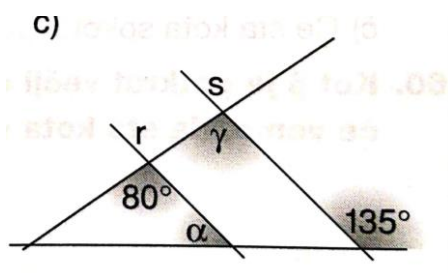
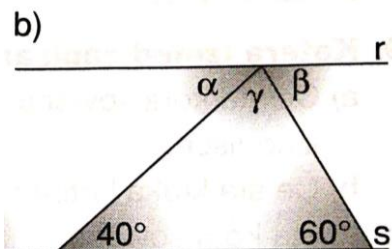
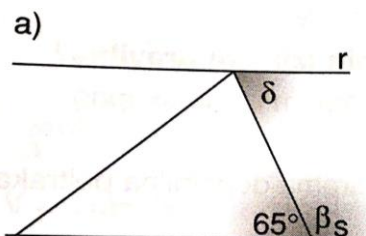


RAČUNANJE NEZNANIH KOTOV – UTRJEVANJE

1) Izračunaj neznane kote.



2) Izračunaj neznane kote.

