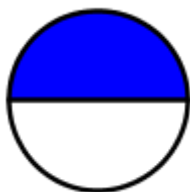


1. Nadaljuj zaporedje: 8125, 8075, 8025, \_\_\_\_\_, \_\_\_\_\_, \_\_\_\_\_, \_\_\_\_\_

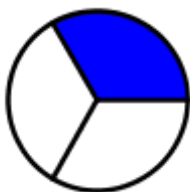
2. Poišči vsoto in razliko števil 3256 in 1691.

Vsota števil 3256 in 1691 je \_\_\_\_\_, razlika pa \_\_\_\_\_.

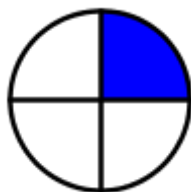
3. Zapiši z ulomkom, koliki del lika je pobarvan.



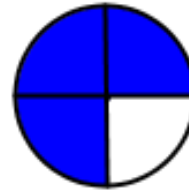
\_\_\_\_\_



\_\_\_\_\_



\_\_\_\_\_



\_\_\_\_\_

4. Denarne vrednosti zapiši na drugačen način.

489 € 5 c = \_\_\_\_\_ €

789, 05 € = \_\_\_\_\_ € \_\_\_\_\_ c

5. Izračunaj.

$\frac{1}{6}$  od 12 = \_\_\_\_\_

$\frac{1}{3}$  od \_\_\_\_\_ = 3

$$\begin{array}{r} 268,67\text{ €} \\ + 574,96\text{ €} \\ \hline \end{array}$$

$$\begin{array}{r} 802\text{ € } 12\text{ c} \\ - 59\text{ € } 55\text{ c} \\ \hline \end{array}$$

$6 + 3 \cdot 7 + 2 =$  \_\_\_\_\_

$5 \cdot 6 + 7 \cdot 8 =$  \_\_\_\_\_

$9 \cdot (6 - 4) =$  \_\_\_\_\_

236 · 5

34 · 8